

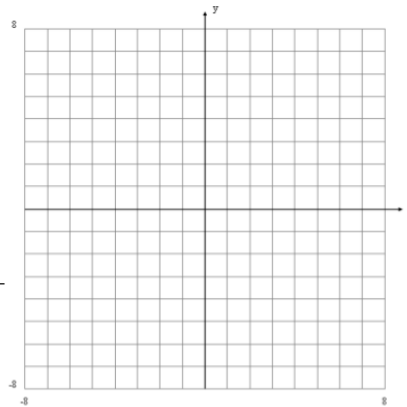
Equation: $x + 2y = 6$

x-intercept: _____

y-intercept: _____

slope: _____

slope-intercept equation: _____



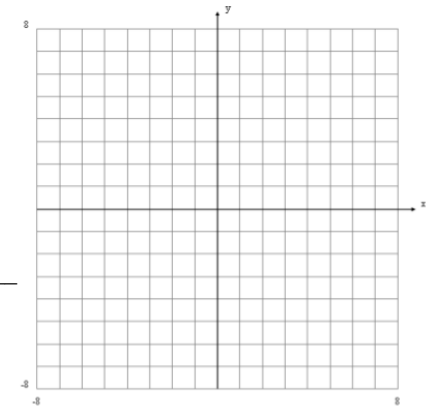
Equation: $x - 3y = -6$

x-intercept: _____

y-intercept: _____

slope: _____

slope-intercept equation: _____



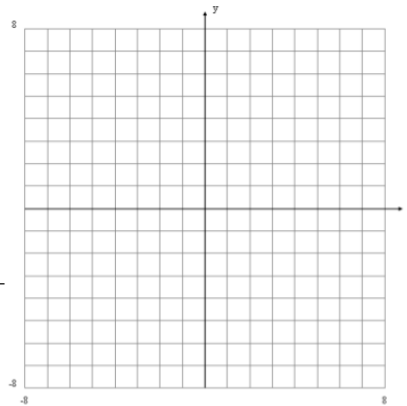
Equation: $2x - 5y = -20$

x-intercept: _____

y-intercept: _____

slope: _____

slope-intercept equation: _____



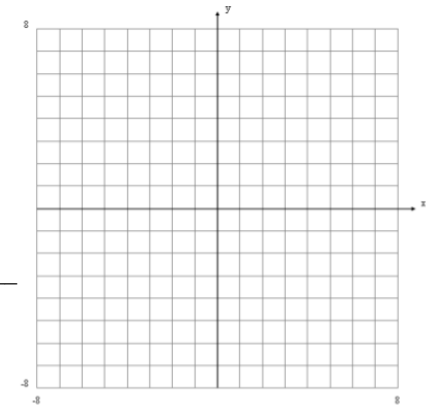
Equation: $5x + 4x = -20$

x-intercept: _____

y-intercept: _____

slope: _____

slope-intercept equation: _____



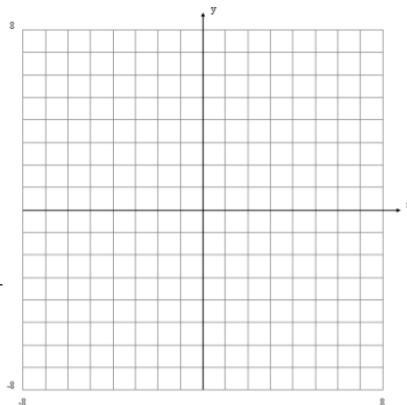
Equation: $5x - y = -15$

x-intercept: _____

y-intercept: _____

slope: _____

slope-intercept equation: _____



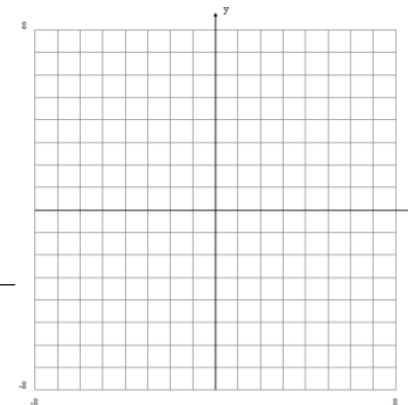
Equation: $x + y = 7$

x-intercept: _____

y-intercept: _____

slope: _____

slope-intercept equation: _____



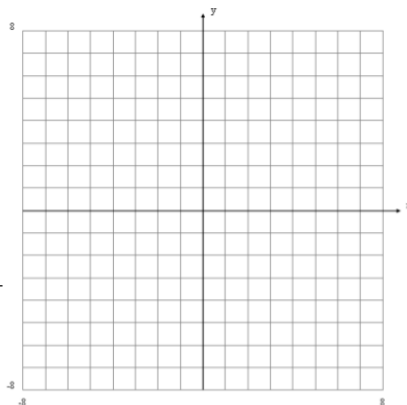
Equation: $x - y = -5$

x-intercept: _____

y-intercept: _____

slope: _____

slope-intercept equation: _____



Equation: $2x - y = -4$

x-intercept: _____

y-intercept: _____

slope: _____

slope-intercept equation: _____

